

[Examrace: Downloaded from examrace.com \[https://www.examrace.com/\]](https://www.examrace.com/)

For solved question bank visit [doorsteptutor.com \[https://www.doorsteptutor.com\]](https://www.doorsteptutor.com) and for free video lectures visit [Examrace YouTube Channel \[https://youtube.com/c/Examrace/\]](https://youtube.com/c/Examrace/)

HBCSE Olympiads (Homi Bhabha Centre for Science Edu.) IOQM (Indian Olympiad Qualifier in Mathematics) Coaching Programs



154 Numeric, 0 MCQs (& PYQs) with Full Explanations (2024-2025 Exam)

[Click Here to View & Get Complete Material \[https://www.doorsteptutor.com/Exams/HBCSE-Olympiad/IOQM/Questions/\]](https://www.doorsteptutor.com/Exams/HBCSE-Olympiad/IOQM/Questions/)

Rs. 150.00

3 Year Validity (Multiple Devices)


NSO Level 2 Class 4 2012 - 13 Part 1 with Solutions and Explanations at Doorsteptutor. Com

Q-12 Which is the best representation of an insect?


A.




B.



C.




D.



[Learning Parts of Insect: Class 1/Grade 1 - Kids-Teaching-Kids \[https://www.youtube.com/watch?v=gnwr81JqQt4\]](https://www.youtube.com/watch?v=gnwr81JqQt4)

Q-13 Study the diagram carefully. Activities occurring at which place could cause acid rain?




- A. U, P and Q
- B. Q and R
- C. S and U
- D. T and U

[Air Pollution, Pollutants and Control \(Environment - Pollution\) - Important for NTA NET \[https://www.youtube.com/watch?v=4hDHtmjdJZQ\]](https://www.youtube.com/watch?v=4hDHtmjdJZQ)

Q-14 Which of the following beaks is correctly matched to its functions?


Beak	Function
	Picking Seeds

A.




Underwater Fishing

B.



Sucking nectar

C.



<p>D.</p> 	<p>Tearing meat</p>
---	---------------------

Table of Birds

[NCERT Class 4 EVS Chapter 16: A Busy Month \(Nesting Habits\) - NSO/NSTSE/Olympiad|English|CBSE](https://www.youtube.com/watch?v=E0jwcxsVnnA)
[\[https://www.youtube.com/watch?v=E0jwcxsVnnA\]](https://www.youtube.com/watch?v=E0jwcxsVnnA)

Q-15 Which of the following adaptations peculiar to the polar bear are structural adaptations?

P: Hibernating during cold

Q: Having a thick coat of fur

R: Having stiff hairs on the underside of its feet

S: Having a layer of fat under the skin.

Choices

A. P and Q

B. Q and R

C. P, Q and R

D. Q, R and S

[NCERT Class 7 Science Chapter 7: Weather, Climate & Adaptations of Animals to Climate \(NSO/NSTSE\)](https://www.youtube.com/watch?v=-GL5Q47LR2E)
[\[https://www.youtube.com/watch?v=-GL5Q47LR2E\]](https://www.youtube.com/watch?v=-GL5Q47LR2E)

Q-16 The given foods are rich in _____.



- A. Proteins
- B. Fats
- C. Carbohydrates
- D. Roughage

[NCERT Class 6 Science Chapter 2: Components of Food \(NSO/NSTSE/Olympiad\) Examrace|English](https://www.youtube.com/watch?v=LiDPddiXWuc)
[\[https://www.youtube.com/watch?v=LiDPddiXWuc\]](https://www.youtube.com/watch?v=LiDPddiXWuc)