

Examrace: Downloaded from examrace.com [https://www.examrace.com/]

For solved question bank visit doorsteptutor.com
[https://www.doorsteptutor.com] and for free video lectures visit Examrace
YouTube Channel [https://youtube.com/c/Examrace/]

NSTSE (National Science Talent Search Exam- Unified Council) Class 1 Coaching Programs


 Video Course 2024 (9 Lectures [2 Hrs : 4 Mins]): Offline Support

[Click Here to View & Get Complete Material](#)

<https://www.doorsteptutor.com/Exams/NSTSE/Class-1/Lectures/>

Rs. 100.00

1 Month Validity (Multiple Devices)

 Study Material (24 Notes): 2024-2025 Syllabus

[Click Here to View & Get Complete Material](#)

<https://www.doorsteptutor.com/Exams/NSTSE/Class-1/Study-Material/>

Rs. 100.00

3 Year Validity (Multiple Devices)

NSTSE Class 5 2019 Part 3 Question Paper

19. What is the missing number in the box?

$$0.375 = \frac{\quad}{16}$$

A. 3

B. 4

C. 6

D. 7

20. Which option is the ratio of 1 m 5 cm to 3.5 km?


A. 3: 7

B. 3: 10

C. 3: 700


D. 3: 10000

21. What fraction of 1 m is the height of plant?



- A. $\frac{5}{10}$ cm
- B. $\frac{7}{100}$ cm
- C. $\frac{5}{100}$ cm
- D. $\frac{7}{10}$ cm

22. In the diagram the large equilateral triangle is divided into a number of smaller of smaller equilateral triangles. What percentage of the large triangle is shaded?



A. 60%

B. 65 %

C. 75%

D. 80%

23. What is the area of a square if its perimeter is 40 cm?

A. $10cm^2$

B. $100cm^2$

C. $80cm^2$

D. $20cm^2$

24. If the cost price of 12 pens is equal to the selling price of 8 pens the gain percent is

A. 50%

B. 30%

C. 12%

D. 60%

25. Yesterday the police asked four students for their date of birth. Which of them did not lie?

A. vansh (17 - 13 - 2008)

B. Riya (32 - 05 - 2008)

C. Hari (14 - 07 - 2008)

D. Tanishka (30 - 02 - 2009)